



# CHINKARA ENGLISH ACADEMY SAYLA



## Diwali Vacation Homework 2024-25

Dear Students,

As we celebrate Diwali, a festival full of joy and lights, let's also take time to continue learning. This homework is designed to help you stay in touch with your studies during the holidays.

Wishing you and your family a Happy, Safe, and Bright Diwali! Enjoy the celebrations, and may the festival bring lots of happiness and success to you.

*Instructions:*

1. Complete all the given homework in a notebook.
2. Be creative and do your work neatly.
3. Submit your homework on the first day after the vacation.
4. We will resume our classes from Friday, 8th November, 2024.

Have a Happy Diwali and keep learning!

Explore...

Enjoy...

Enrich...

Headmaster



Principal

# Diwali Vacation Homework 2024-25

Class – 2

Subject – Mathematics

Q1 Solve addition

- |                       |                        |
|-----------------------|------------------------|
| i. $3 + 4 =$ _____    | xi. $7 + 6 =$ _____    |
| ii. $5 + 6 =$ _____   | xii. $8 + 5 =$ _____   |
| iii. $7 + 2 =$ _____  | xiii. $9 + 3 =$ _____  |
| iv. $8 + 3 =$ _____   | xiv. $4 + 4 =$ _____   |
| v. $6 + 5 =$ _____    | xv. $6 + 7 =$ _____    |
| vi. $9 + 4 =$ _____   | xvi. $3 + 8 =$ _____   |
| vii. $2 + 8 =$ _____  | xvii. $2 + 5 =$ _____  |
| viii. $4 + 7 =$ _____ | xviii. $7 + 7 =$ _____ |
| ix. $3 + 9 =$ _____   | xix. $8 + 4 =$ _____   |
| x. $5 + 5 =$ _____    | xx. $9 + 2 =$ _____    |

Q2. SOLVE SUBTRACTION

- |                        |                         |
|------------------------|-------------------------|
| i. $9 - 4 =$ _____     | xi. $15 - 9 =$ _____    |
| ii. $7 - 3 =$ _____    | xii. $10 - 4 =$ _____   |
| iii. $6 - 2 =$ _____   | xiii. $8 - 3 =$ _____   |
| iv. $8 - 5 =$ _____    | xiv. $7 - 2 =$ _____    |
| v. $10 - 6 =$ _____    | xv. $6 - 1 =$ _____     |
| vi. $5 - 1 =$ _____    | xvi. $9 - 6 =$ _____    |
| vii. $12 - 7 =$ _____  | xvii. $13 - 7 =$ _____  |
| viii. $14 - 8 =$ _____ | xviii. $14 - 9 =$ _____ |
| ix. $11 - 5 =$ _____   | xix. $12 - 5 =$ _____   |
| x. $13 - 6 =$ _____    | xx. $10 - 8 =$ _____    |

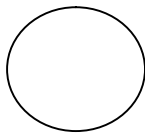
Q3. Look at the pictures and write their sides.



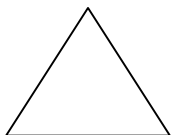
= .....



= .....



= .....



= .....

Q4. Write forward counting.

105	106	107							
-----	-----	-----	--	--	--	--	--	--	--

98		100	101		103				
----	--	-----	-----	--	-----	--	--	--	--

78			81		83				
----	--	--	----	--	----	--	--	--	--

Q5. Write backward counting.

	65		63		60			57	
--	----	--	----	--	----	--	--	----	--

	82			79			76	75	
--	----	--	--	----	--	--	----	----	--

		93				97		99	
--	--	----	--	--	--	----	--	----	--

Q6. Add the following.

(a)  $45 + 20 =$

(b)  $13 + 9 =$

(c)  $32 + 16 =$

(d)  $66 + 12 =$

(e)  $24 + 13 =$

(f)  $24 + 33 =$

Q7. Subtract the following.

(a)  $25 - 12 =$

(b)  $30 - 15 =$

(c)  $45 - 15 =$

(d)  $40 - 35 =$

(e)  $86 - 20 =$

(f)  $44 - 22 =$

Q8. Write Digits in Word (Number Name).

(a)  $25 =$  Twenty-five

(b)  $32 =$  .....

(f)  $67 =$  .....

(c)  $44 =$  .....

(g)  $79 =$  .....

(d)  $63 =$  .....

(h)  $86 =$  .....

(e)  $15 =$  .....

(i)  $91 =$  .....

Q9. Make a Circle on the Greatest Number.

(a) 23 , 12

(d) 12 , 35

(b) 19 , 45

(e) 64 , 16

(c) 24 , 46

(f) 11 , 9

Q10. Put the Correct Sign (<, >, or =).

(a) 12 < 44

(b) 24 \_\_\_ 30

(e) 95 \_\_\_ 95

(c) 45 \_\_\_ 11

(f) 38 \_\_\_ 38

(d) 61 \_\_\_ 36

(g) 79 \_\_\_ 80

Q11. Write in Increasing Order (Ascending Order).

Example:- 8, 29, 15, 3, 45, 22

Answer: 3, 8, 15, 22, 29, 45

(a) 12, 24, 9, 45, 60, 32

Answer: \_\_\_\_\_

(c) 11, 14, 25, 4, 64, 23, 10

Answer: \_\_\_\_\_

(b) 11, 36, 15, 76, 42, 3

Answer: \_\_\_\_\_

(d) 25, 43, 24, 35, 46, 19, 40

Answer: \_\_\_\_\_

Q12. Find the Product (Multiply).

4 6 3

× 4

\_\_\_\_\_

\_\_\_\_\_

2 1 6

× 2

\_\_\_\_\_

\_\_\_\_\_

8 2 3

× 5

\_\_\_\_\_

\_\_\_\_\_


6 7 9

× 7

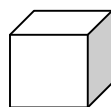
\_\_\_\_\_

\_\_\_\_\_

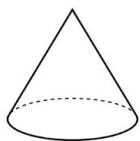
Q13. Write down the faces, edges and vertices (corners).




Faces = .....  
Edges = .....  
Vertices = .....



Faces = .....  
Edges = .....  
Vertices = .....



Faces = .....  
Edges = .....  
Vertices = .....



Faces = .....  
Edges = .....  
Vertices = .....

Q14. There are 12 green balls and 17 blue balls in a basket. How many balls are there in all?

$$12 + 17 = \underline{\hspace{2cm}}$$

Q15. Johan has 10 chocolates. His father gave him 4 more. How many chocolates does he have altogether?

$$10 + 4 = \underline{\hspace{2cm}}$$

Q16. There are 18 balloons. Out of them, 8 balloons burst. How many balloons are left?

$$18 - 8 = \underline{\hspace{2cm}}$$

Q17. Rina plucked 32 mangoes. She gave 20 mangoes to her neighbor. How many mangoes are left with her?

$$32 - 20 = \underline{\hspace{2cm}}$$

Q18. birds are sitting on a tree. 21 more birds join them. How many birds are sitting on the tree now?

$$14 + 21 = \underline{\hspace{2cm}}$$

Q19. Ram has 64 crayons. He gave 30 crayons to his sister. How many crayons are left with him?

$$64 - 30 = \underline{\hspace{2cm}}$$

Q20. Write the tables from 2 to 20.

कक्षा - 2

विषय हिन्दी

प्रश्न 1 संज्ञा की परिभाषा व प्रकार लिखिए?

प्रश्न 2 सर्वनाम की परिभाषा व प्रकार लिखिए?

प्रश्न 3 मां कविता लिखिए

प्रश्न 4 निम्न शब्दों के विलोम शब्द लिखिए?

ऊपर, आगे, काला, दिन, जाना, रोना, सुबह, देना, अच्छा,

प्रश्न 5 निम्न शब्दों के बहुवचन शब्द लिखिए?

मिठाई, दवाई, पुस्तक, माला, साड़ी, बच्चा, कमरा, गाड़ी, नदी

प्रश्न 6 लिंग बदलकर लिखिए?

पिता, दादा, चाचा, मामा, काका, शेर, घोड़ा, बैल, हाथी

प्रश्न 7 “ए”की मात्रा वाले 10 शब्द लिखिए?

प्रश्न 8 “ओ” की मात्रा वाले 10 शब्द लिखिए

**Class – 2**

**Subject – E V S**

Q1. Draw a beautiful drawing of Diwali in your notebook & color it.

Q2. Collect the different types of leaves. And paste it in your notebook.

Q3. Make a project by using cardboard, paper & other things.

Q4. Answer the following questions:

(a) Name two animals that eat grass: \_\_\_\_\_

(b) Name two animals that eat flesh: \_\_\_\_\_

(c) Name two animals that live in water: \_\_\_\_\_

(d) Name two animals that have wings: \_\_\_\_\_

Q5. Draw a beautiful plant and write its parts' names.

Q6. Arrange the following animals according to the place where they live:-

CROW, LION, TIGER, FISH, PARROT, CROCODILE,  
OCTOPUS, BEES, SPARROW, ZEBRA, DOG, TORTOISE.

**Land**

**Water**

**Air**

.....

.....

.....

.....

.....

.....

.....

.....

.....

.....

.....

.....

Q5. How do you address these relations:-

(a) Father's father: \_\_\_\_\_

(b) Father's sister: \_\_\_\_\_

(c) Mother's mother: \_\_\_\_\_

(d) Mother's brother: \_\_\_\_\_

(e) Mother's sister: \_\_\_\_\_

Q6. Answer the following questions:-

- A. What are the animals that only eat plants called?
- B. How many bones do we have in our body?
- C. What are animals that eat only meat called?
- D. What are animals that eat both plants and meat called?
- E. What plant grows in the desert?
- F. What is the longest bone in the body called?
- G. How many teeth do most adults have?
- H. Which is the shortest bone of our body?

Q7. Draw a picture of Solar system and tell the answer of following questions:-

- A. How many planets in the solar system?
- B. Which planet in our solar system is known as the Red Planet?
- C. What is the name of the biggest planet in our solar system?
- D. Which planet in our solar system is known as the Blue Planet?
- E. What is the hottest planet in the solar system?
- F. What is the smallest planet in the solar system?
- G. Which planet in the solar system has rings around it?

---

**Class – 2**

**Subject – English**

1. Make a chart paper on the topic nouns types of nouns?

2. Write a opposite words of:-

- (a) Hot
- (b) High
- (c) Big
- (d) Strong
- (e) Up
- (f) Win
- (g) Empty
- (h) Right
- (i) Start

(j) Beautiful

3. Complete each word with a vowel or vowels. (a,e,i,o,u)

(a) B\_\_g

(b) C\_\_p

(c) V\_\_n

(d) C\_\_t

(e) S\_\_n

(f) F\_\_n

(g) T\_\_n

(h) T\_\_nt

(i) W\_\_st

4. What is assertive sentence? Give examples.

5. Make a family tree.

6. Paste a picture with vowels .

7. Write means of transports name. (Land, air, water ).

8. Do 2 pages cursive writing.

---

## CHINKARA ENGLISH ACADEMY SAYLA

🌐 [www.ceasayla.com](http://www.ceasayla.com) | 📞 9024948329

We are social on Instagram | X (Twitter) | Facebook | YouTube

